

Addition Strategies




Aa



Curious About Math with
**Curious
George**

There are 4 fish in the tank.
If you doubled the number
of fish, how many
would there be?



**Show What You Know****Model Addition**Use  to show each number. Draw the cubes. Write how many in all.

1.

$$2 \quad + \quad 3$$

Use Symbols to Add

Use the picture. Write the addition sentence.

2.



○ ○

3.



○ ○

Add in Any OrderUse  and  to add. Color to match.

Write each sum.

4.



$$1 + 4 = \underline{\quad}$$

5.



$$4 + 1 = \underline{\quad}$$

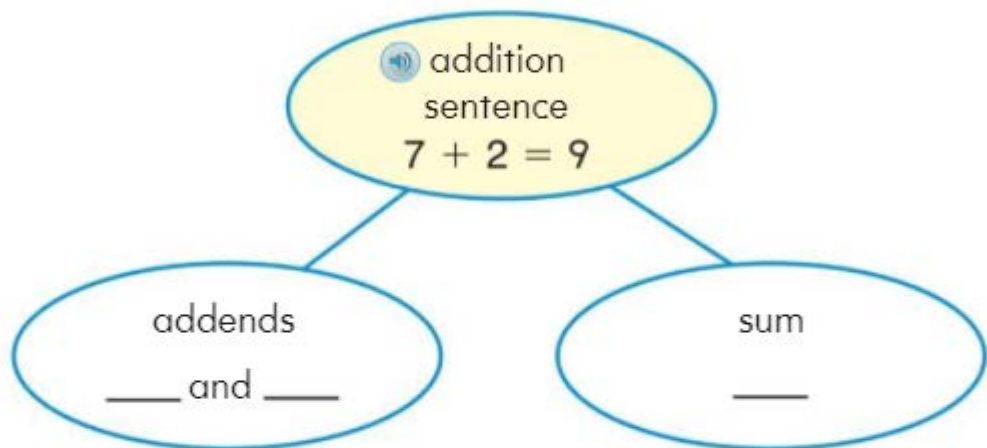
This page checks understanding of important skills needed for success in Chapter 3.

**Vocabulary Builder****Review Words**

add
 adds
 addition
 sentence
 sum

Visualize It

- Write the addends and the sum for the addition sentence.

**Understand Vocabulary**




Use a review word to complete the sentence.





- 4 and 3 in $4 + 3 = 7$ are _____ .
- $4 + 3 = 7$ is an _____ .
- 4 cubes and 3 cubes are put together to _____ the groups.

Game Ducky Sums

Materials •  •  •  •   • 

Play with a partner.

- Put your  on START.
- Toss the . Move your  that number of spaces.

- Use a , a , and a  to make the spinner. Spin.
- Add the number you spin and the number your  is on. Your partner checks the sum.
- Take turns. The winner is the first person to get to END.

START



END