

Addition Concepts

© 2009 by Marshall Cavendish Publishing Company • All rights reserved. Curious George is a registered trademark of Houghton Mifflin Harcourt Publishing Company. All rights reserved. The characters, names, and other indicia of Curious George are registered trademarks of Houghton Mifflin Harcourt Publishing Company.

Curious About Math with

Curious
George

How many kittens can you add to the group to have 10 kittens? Explain.



**Show What You Know****Explore Numbers 1 to 4**

Use ● to show the number.
Draw the ●.

1. 

2. 

Numbers 1 to 10

How many objects are in each group?



_____ chicks



_____ eggs



_____ flowers

Numbers 0 to 10

How many spots are on the ladybug?









This page checks understanding of important skills needed for success in Chapter 1.

**Personal Math Trainer**

Online Assessment
and Intervention

**Vocabulary Builder****Review Words**

add to



add



1 more

Visualize It

Draw to show 1 more.

Draw to show adding to.


1 more

___ in all


add to

___ in all

Understand Vocabulary

1 Complete the sentences with review words.

- Sue wants to know how many counters are in two groups. She can _____ to find out.
- Pete has 2 apples. May has 3 apples. May has _____ apple than Pete.

Game Addition Bingo

Materials

- 2 sets of Numeral Cards 0–4
- 18 ● • 4 ■ • 4 ■

Play with a partner.

- 1 Mix the cards in each set. Put both sets facedown.
- 2 Take a card from each set. Join ■ and ■ to add.
- 3 The other player checks your answer.
- 4 If you are correct, cover the answer with a ●.
- 5 The other player takes a turn.
- 6 The first player to cover 3 spaces in a row wins.

7	1	8
3	6	5
0	2	4

Player 1

2	4	3
7	5	0
1	8	6

Player 2

